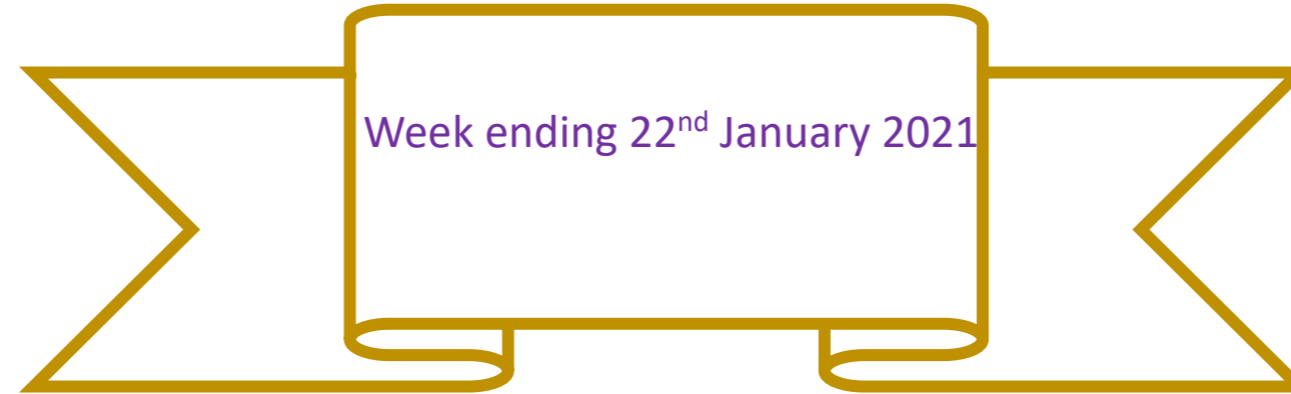


# Super Successes in School!



Building towers and taking turns.

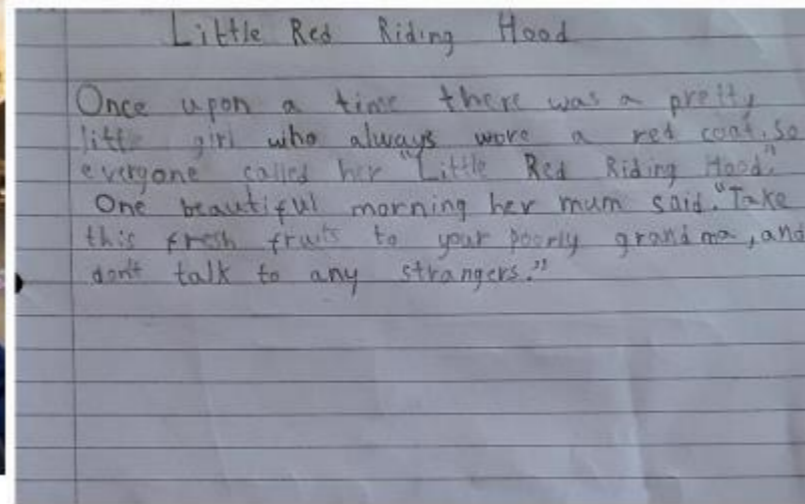
Little Acorns

Poppy Pike Yesterday 11:22 AM



Poppy's Pop art portrait

Year 2



Year 2 Samuel's story writing.



Year 2 Shape Sequences

Problem solving!

Little Acorns



Pop Art Self Portraits

Year 2



Story telling in a group

Year 2





We have been learning about Winter and Ice. We explored what happens when we froze bananas and made it into Banana Ice Cream! It was delicious!

Reception

Dear Sir,

I am writing to complain about all the cars that were put side my windows. I think that all of the changes of the view is simply an eyes for my children. You have made a use to turn into a building sight. There was lots of lovely wild life. Also you have ruined clean and natural habitat. The place was so tranquil. I loved the view of the mountains.

However, you have ruined perfect views with building cars and busy roads. When I moved here, it was so beautiful and lovely and now it is so ruined with cars it just can't stand it anymore. All of your low buildings are blocking my view of the mountains.





I do hope you are not planning to build any more houses.

Yours faithfully  
Miss Rosie

Formal Letter of Complaint

Rosie B – Year 3

Michelle is playing a game, throwing some balls into buckets.

 4 points	 1 point
 5 points	 11 points

1) Michelle threw some balls and they all landed in the red bucket except one. Michelle scored 29 points. How many balls did she throw into the red bucket? Show your calculations.

2) Michelle threw some balls and they landed in red and yellow buckets. Michelle scored between 34 and 38 points. How many balls might she have thrown? Find all the possibilities.

$28 + 4 = 7$     $7 + 1 = 8$   
Michelle threw 8 balls


34, 35, 36, 37, 38

Michelle could of scored <sup>and</sup> 5, 3, 6, 13, 7.

$35 = 5$	red	+ 3	yellow
$36 = 4$	red	+ 4	yellow
$37 = 7$	red	+ 3	yellow

Problem Solving using the 4 Times Table

Zoe D – Year 3



Exploring Parts of a Castle

Rovan S – Year 3

